



# NATA

## THEORY SAMPLE PAPER

1. 'Parliament' is related to 'Great Britain' in the same way as 'Congress' is related to;

- A. Japan
- B. India
- C. U.S.A
- D. Netherlands
- E. Non of these

2. A roofing tile which has the shape of an S laid on its side

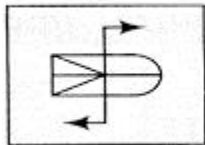
- A. Reflective tile
- B. Pan tile
- C. Ceramic Tile
- D. Reflective tile

3. Wax; Candle; ;?Paper

- A. Tree
- B. Bamboo
- C. Pulp
- D. Wood
- E. None of these

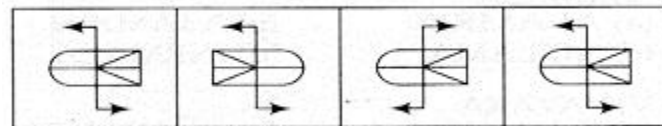
4. in each of the following question choose the correct mirro image of the figure (X) from amongst the four alternatives (a,b,c,d) along with it.

### Problem Figure



(X)

### Answer Figures



(a)

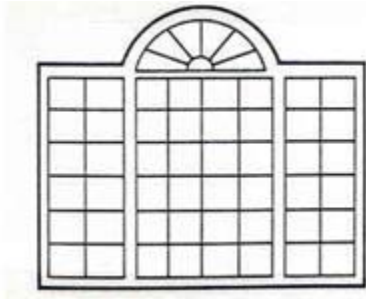
(b)

(c)

(d)

- A. A
- B. B
- C. C
- D. D

5. Identify the type of the displayed building component



- A. French window
- B. Louvered window
- C. Palladian window
- D. Jalousie window

6. Acoustics is the study of

- A. Light
- B. Sound
- C. Heat
- D. Water Proofing

7. Identify the given image

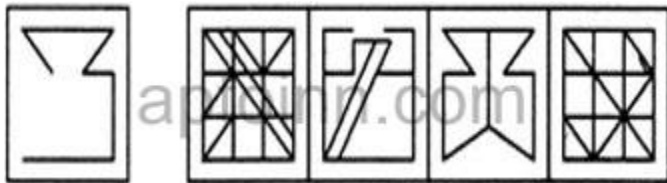


- A. "Colossus "
- B. Colosseum
- C. Cathedral
- D. Castle

8. Select the odd one out among the following given words.

- A. Triangle
- B. Tangent
- C. Square
- D. Rhombus
- E. Pentagon

9. Find out the alternative figure which contains figure (X) as its part.



- A. A
- B. B
- C. C
- D. D

10. Which word is the synonym of "voluble"

- A. worthwhile
- C. circular

- B. loquacious
- D. serious

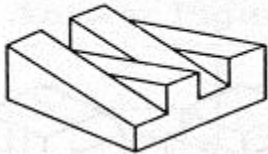
11. The tiles preferred in Toilets are

- A. Smooth
- C. Non -Slippery

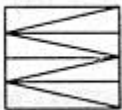
- B. Textured
- D. Hard

12. The 3 D problem figure shows the view of an object. Identify it's top view from among the answer figure.

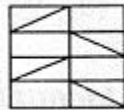
**Problem Figure**



**Answer Figures**



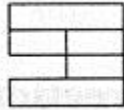
(a)



(b)



(c)



(d)

- A. A
- C. C

- B. B
- D. D

13. Identify the given image



- A. Ancient Mausoleum
- C. Parthenon

- B. Light house of alexandraia
- D. "None of the above "

14. In each of the following questions one of the figures is different from the rest. Spot the figure.



- A. A  
 C. C  
 E. E
- B. B  
 D. D

15. Victoria memorial is located in

- A. Mumbai  
 C. New Delhi
- B. Calcutta  
 D. Jaipur

16. Minute; Hour

- A. Drop; Ocean  
 C. Cup; Tea set  
 E. School; Studend
- B. People; Crowd  
 D. Paise; Rupee

17. The city of chandigarh is designed by

- A. Charles correa  
 C. Le corbusier
- B. Louis khan  
 D. Achyut Kanvinde

18. In who's memory is the displayed structure built "



- A. Memory of british rule  
 C. Memory of old kings
- B. Memory of Dead soldiers  
 D. None of the above

19. In each of the following questions, you are given a combination of alphabets and/or numbers followed by four alternatives (1), (2), (3) and (4). Choose the alternative which is closely resembles the water-image of the given combination.

E8 t 4e9C

(1) E8 t 4e9C (2) E8 t 4e9C

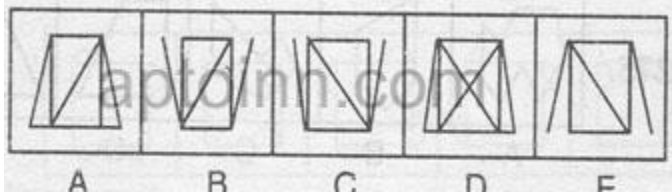
(3) E8 t 4e9C (4) E8 t 4e9C

- A. 1
- B. 2
- C. 3
- D. 4

20. which one is primary color

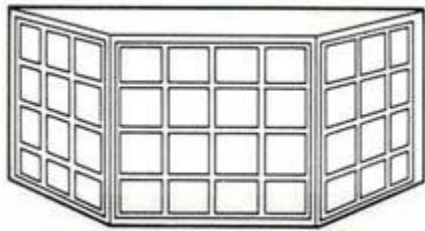
- A. black
- B. orange
- C. yellow
- D. green

21. In each of the following questions one of the figures is different from the rest. Spot the figure.



- A. A
- B. B
- C. C
- D. D
- E. E

22. Identify the type of the displayed building component

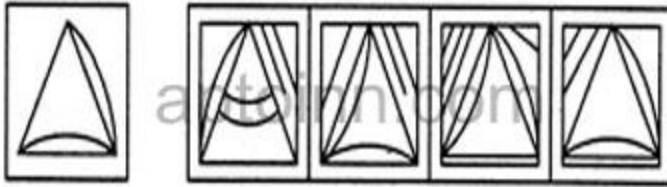


- A. Bow window
- B. Bay window
- C. Casement window
- D. jalousie window

23. Which of these cities has the maximum number of historical monuments?

- A. Kolkata
- B. Delhi
- C. Mumbai
- D. Punjab

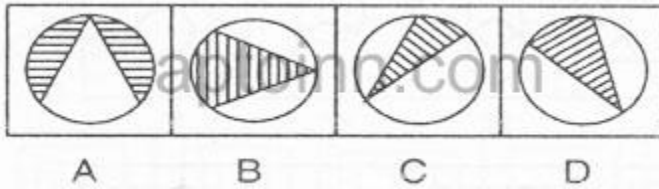
24. Find out the alternative figure which contains figure (X) as its part.



- A. A
- C. C

- B. B
- D. D

25. In each of the following questions one of the figures is different from the rest. Spot the figure.



- A. A
- C. C

- B. B
- D. D

26. Which one of the following is used as heat insulating material

- A. PVC Sheet
- C. Reflective glass

- B. Glass Wool
- D. Coir

27. Identify the given Image



- A. American banquet
- B. Big - Ben
- C. The graet London clock tower
- D. "None of the above "

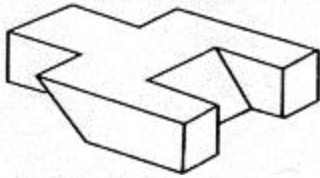
28. Rathas in Mahabalipuram was constructed in the period of

- A. Cholas
- B. Cheras
- C. Pallavas
- D. Pandiyas

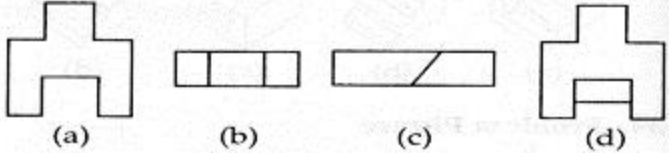
29. the 3 D problem figure shows the view of an object. Identify it's top view from among the answer figure.



**Problem Figure**



**Answer Figures**



A. A

B. B

C. C

D. D

30. Identify the Location of given Building



A. France

B. Italy

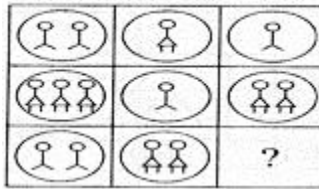
C. Mexico

D. New York

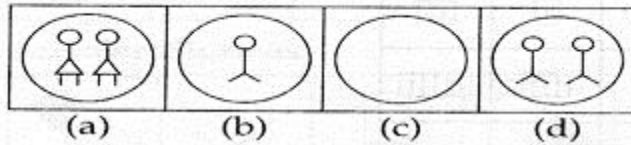


31. in each of the following questions, find out which of the answer figure (a, b, c, d) completes the figure matrix.

**Problem Figures**



**Answer Figures**



- A. A
- B. B
- C. C
- D. D

32. Identify the given image



- A. Remnants of Hampi
- B. Remnants of Indus valley Civilization
- C. Egyptian pyramid base
- D. None of the above

33. Tall is related to Dwarf in the same way as Kind is related to;

- A. Weak
- B. Gentle
- C. Cruel
- D. Forgive
- E. None of these

34. In each of the following questions one of the figures is different from the rest. Spot the figure.



- A. A
- B. B
- C. C
- D. D

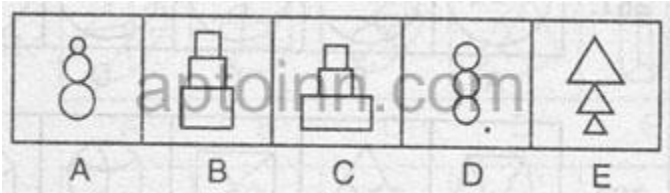
35. Which word is the antonyms of "analogos"

- A. not comparable
- B. not capable
- C. not culpable
- D. not congenial

36. Which of the following cities has the maximum number of historical monuments

- A. Kolkata
- B. Delhi
- C. Mumbai
- D. Punjab

37. In each of the following questions one of the figures is different from the rest. Spot the figure.



- A. A
- B. B
- C. C
- D. D
- E. E

38. The first and simplest of the three Greek orders and the only one that normally has no base

- A. Cluster
- B. Inoic
- C. Doric
- D. Corinthian

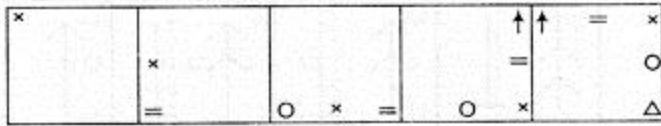
39. WHAT IS THE NAME OF THIS STRUCTURE AND WHERE IS IT LOCATED ?



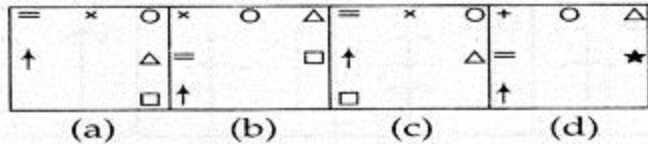
- A. L'Hemisferic - Spain
- B. Guggenheim Museum - Spain
- C. Bird's Nest Stadium - China
- D. Bank of China - Hong Kong

40. in each of the following questions which figure must come after the problem figure if the sequence is continuous.

**Problem Figures**



**Answer Figures**



A. A  
C. C

B. B  
D. D

Ans:

- |       |       |       |       |       |       |       |       |       |       |
|-------|-------|-------|-------|-------|-------|-------|-------|-------|-------|
| 1. C  | 2. B  | 3. C  | 4. B  | 5. C  | 6. B  | 7. B  | 8. B  | 9. A  | 10. B |
| 11. C | 12. C | 13. A | 14. C | 15. B | 16. C | 17. C | 18. B | 19. D | 20. C |
| 21. D | 22. B | 23. B | 24. D | 25. A | 26. B | 27. B | 28. C | 29. D | 30. B |
| 31. C | 32. B | 33. C | 34. C | 35. A | 36. B | 37. D | 38. C | 39. B | 40. C |