



NATA

THEORY SAMPLE PAPER

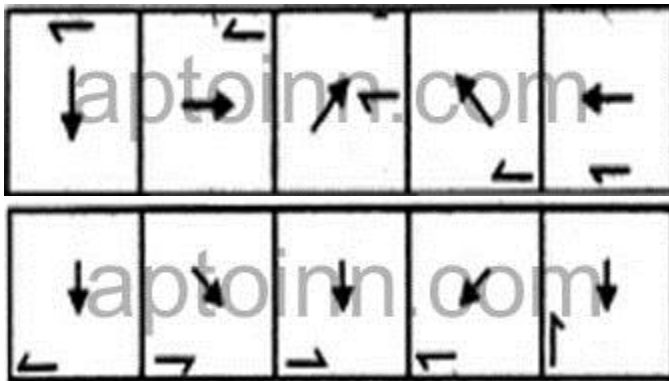
1. Select the odd one out among the following given words.

- | | |
|--------------|-----------|
| A. Manganese | B. Rubber |
| C. Salt | D. Gold |
| E. Stone | |

2. The main hall of an ancient Roman house, containing an opening to the sky (compluvium) through which rainwater falls to a tank or cistern below

- | | |
|-----------------|--------------|
| A. Amphitheatre | B. Courtyard |
| C. Atrium | D. Deck |

3. Each of the following questions consists of five figures marked A, B, C, D and E called the Problem Figures followed by five other figures marked 1, 2, 3, 4 and 5 called the Answer Figures. Select a figure from amongst the Answer Figures which will continue the same series as established by the five Problem Figures. Select a figure from amongst the Answer Figures which will continue the same series as established by the five Problem Figures.



- | | |
|------|------|
| A. A | B. B |
| C. C | D. D |
| E. E | |

4. Sikkim; Gangtok; Manipur;?

- | | |
|-------------|----------------|
| A. Dispur | B. Cherrapunji |
| C. Shillong | D. Imphal |

E. Assam

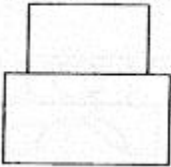
5. the velocity of the wind is related to

- A. revolution of the earth
- C. pressure gradient

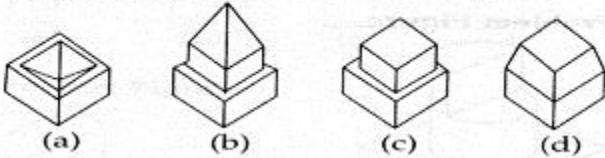
- B. distance from the sun
- D. temperature

6. identify the correct 3 D figure from among the answer figure, which has the elevation, as the problem figure given below.

Problem Figure

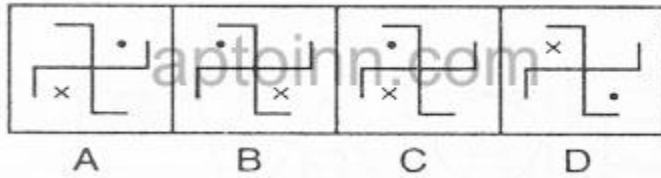


Answer Figures



- A. A
- C. C
- B. B
- D. D

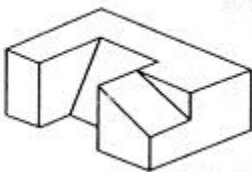
7. In each of the following questions one of the figures is different from the rest. Spot the figure.



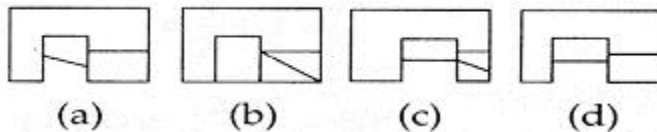
- A. A
- C. C
- B. B
- D. D

8. the 3 D problem figure shows the view of an object. Identify it's top view from among the answer figure.

Problem Figure



Answer Figures



- A. A
- B. B

C. C

D. D

9. Identify the location of the given Building



A. Delhi

B. Hyderabad

C. Mumbai

D. Kolkata

10. Choose the pair related in answer options as it is related in the question "angle : degree"

A. area : square inch

B. milk : quart

C. society : classes

D. letter : alphabet

E. time : minutes

11. Rathas in Mahabalipuram was constructed in the period of

A. Cholas

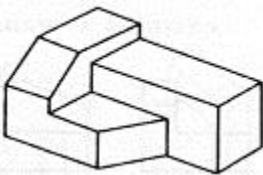
B. Cheras

C. Pallavas

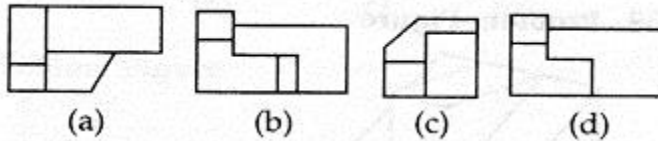
D. Pandiyas

12. The 3 D problem figure shows the view of an object. Identify its top view from among the answer figure.

Problem Figure



Answer Figures



A. A

B. B

C. C

D. D

13. Which word is the synonym of "vacuity"

A. quality

B. certainty

C. plenitude

D. stability

E. incontinence

14. In each of the following questions, you are given a combination of alphabets and/or numbers followed by four alternatives (1), (2), (3) and (4). Choose the alternative which is closely resembles the water-image of the given combination.

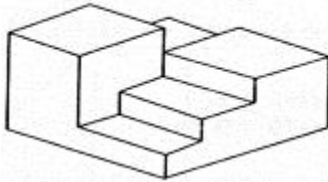
U4P15B7

- (1) 7B15P4U (2) 7B15P4U
(3) 7B15P4U (4) 7B15P4U

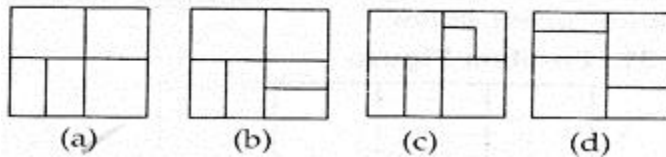
- A. 1 B. 2
C. 3 D. 4

15. The 3 D problem figure shows the view of an object. Identify its top view from among the answer figure.

Problem Figure



Answer Figures



- A. A B. B
C. C D. D

16. Brahadeeshwara temple at tanjore was built by

- A. Cholas B. Cheras
C. Pallavas D. Pandiyas

17. Which word is the antonyms of "benign"

- A. peaceful B. blessed
C. wavering D. malignant

18. Choose the alternative which is closely resembles the mirror image of the given combination.

UTZFY6KH

- (1) HK9YFZTU (2) HK6YFZTU
(3) HK9YFZTU (4) HK6YFZTU

- A. 1
- C. 3

- B. 2
- D. 4

19. Ocean; Water; Glacier;?

- A. Mountain
- C. Ice
- E. None of these

- B. Cave
- D. Refrigerator

20. In each of the following questions, a key figure marked (X) is given, followed by four other alternative figures marked (1), (2), (3) and (4). It is required to select one figure from the alternatives, which fits exactly into figure (X) to form a complete square. Select a figure from the given four alternatives which fits exactly into Figure-X to form a complete square.



- A. 1
- C. 3

- B. 2
- D. 4

21. Identify the given Image



- A. Colossus of Rhodes
- C. Roman Colosseum

- B. Theater of heroes
- D. Forum roman um

22. Which word is the synonym of "plumb"

- A. reversed
- C. horizontal
- E. light

- B. lofty
- D. thin

23. Identify the given image



- A. Parthenon
- C. White House

- B. Pantheon
- D. None of the above

24. Tall is related to Dwarf in the same way as Kind is related to;

- A. Weak
- C. Cruel
- E. None of these

- B. Gentle
- D. Forgive

25. Ajanta-Ellora caves are situated near

- A. Ajmer
- C. Patna

- B. Jaipur
- D. Aurangabad

26. Cuckoos usually $\hat{a}e|a\hat{e}|$. their nests.

- A. resign
- C. give up

- B. desert
- D. quit

27. granite stone is not available in one of the colors

- A. black
- C. green

- B. red
- D. yellow

28. Find out the alternative figure which contains figure (X) as its part.



- A. A
- C. C

- B. B
- D. D

29. The Expansion of R.C.C is

- A. Rainforced cement concrete
- C. Readymix concrete cement

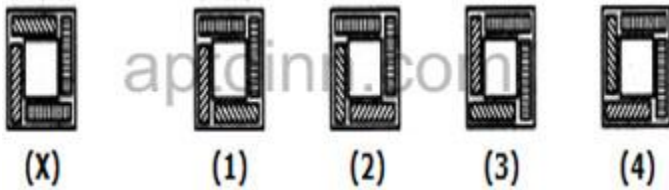
- B. Reinforced concrete cement
- D. Random cement comixture

30. Identify the given image



- A. Petronas tower
- B. Swiss re tower
- C. light house tower
- D. twin building

31. In each of the following questions, choose the water image of the Fig.(X) from amongst the four alternatives (1), (2), (3) and (4) given along with it.



- A. 1
- B. 2
- C. 3
- D. 4

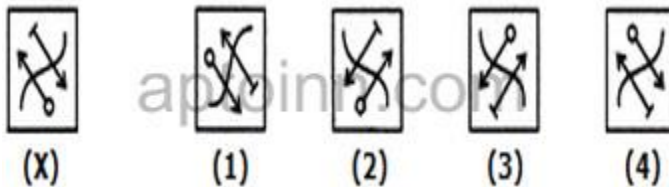
32. Which word is the antonyms of "BOUNDARY "

- A. limit
- B. center
- C. border
- D. margin

33. world's tallest building today is

- A. sear tower, chicago
- B. petronox tower, kulalumpur
- C. world trade centre, newyork
- D. empire state building

34. In each of the following questions, choose the water image of the Fig.(X) from amongst the four alternatives (1), (2), (3) and (4) given along with it.



- A. 1
- B. 2
- C. 3
- D. 4

35. A Structure constructed In the memory of a person or as a sign of victory or affection is called

- A. Minaret
- B. Tomb
- C. Monastery
- D. Palace

36. In each of the following questions, a key figure marked (X) is given, followed by four other alternative figures marked (1), (2), (3) and (4). It is required to select one figure from the alternatives, which fits exactly into figure (X) to form a complete square. Select a figure from the given four alternatives which fits exactly into Figure-X to form a complete square.

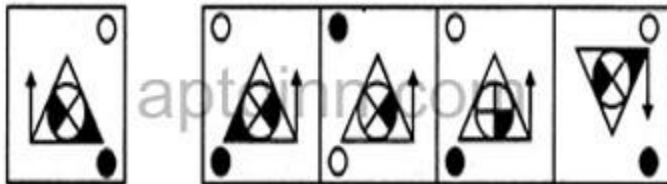


- A. 1
- B. 2
- C. 3
- D. 4

37. Illumination levels are measured in

- A. Volt
- B. Watt
- C. Lux
- D. Decibel

38. Choose the alternative which is closely resembles the mirror image of the given combination.

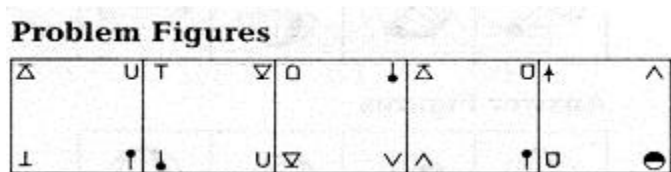


- A. A
- B. B
- C. C
- D. D

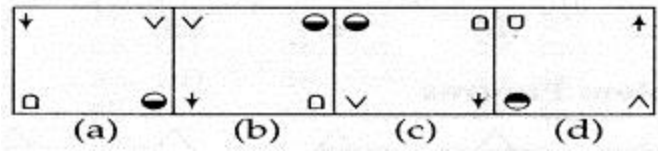
39. As seen in Hagia Sophia, the transitional section between the dome and the rectangular base is a

- A. pendentive.
- B. vault.
- C. keystone.
- D. nave

40. in each of the following questions which figure must come after the problem figure if the sequence is continuous.



Answer Figures



A. A

B. B

C. C

D. D

Ans:

- | | | | | | | | | | |
|-------|-------|-------|-------|-------|-------|-------|-------|-------|-------|
| 1. B | 2. C | 3. A | 4. D | 5. C | 6. C | 7. C | 8. D | 9. B | 10. A |
| 11. C | 12. A | 13. C | 14. C | 15. A | 16. A | 17. D | 18. D | 19. C | 20. D |
| 21. C | 22. C | 23. A | 24. C | 25. D | 26. A | 27. D | 28. A | 29. A | 30. B |
| 31. D | 32. B | 33. B | 34. C | 35. B | 36. D | 37. C | 38. A | 39. A | 40. C |