



# NATA

## THEORY SAMPLE PAPER

1. Which word is the synonym of "squalid"

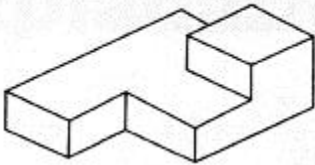
- A. fervid
- B. fervid
- C. pristine
- D. extraneous
- E. abundant

2. The material used widely in desert climate is

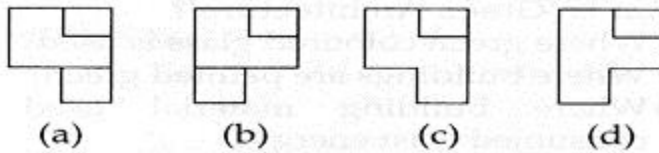
- A. Brick
- B. Wood
- C. Metal
- D. Plastic

3. The 3 D problem figure shows the view of an object. Identify it's top view from among the answer figure.

### Problem Figure

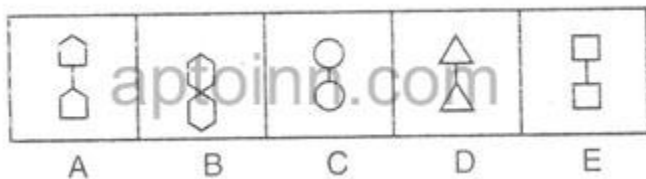


### Answer Figures



- A. A
- B. B
- C. C
- D. D

4. In each of the following questions one of the figures is different from the rest. Spot the figure.




- A. A
- B. B

C. C  
E. E

D. D

5. Identify the displayed type of brick bonding



A. Stretcher bond  
C. Header bond

B. English bond  
D. Header bond

6. Choose the alternative which is closely resembles the mirror image of the given combination.

BR4AQ16HI

(1) IH91QA1RB (2) IH61QA1RB  
(3) IH91QA1RB (4) IH91QA1RB

A. 1  
C. 3

B. 2  
D. 4


7. 'Tree' is related to 'Root' in the same way as 'Smoke' is related to;

A. Cigarette  
C. Heat  
E. Wood

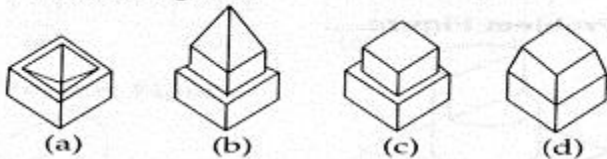
B. Fire  
D. Chimney

8. identify the correct 3 D figure from among the answer figure, which has the elevation, as the problem figure given below.

**Problem Figure**



**Answer Figures**



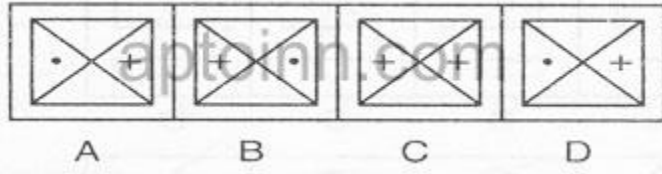
A. A

B. B

C. C

D. D

9. In each of the following questions one of the figures is different from the rest. Spot the figure.



A. A

B. B

C. C

D. D

10. plaster of paris comes in the form of ?

A. powder

B. liquid

C. pebbles

D. rolls

11. Identify the given image



A. Hanging gardens

B. Remnants of persepolis

C. Great mountains

D. Great mountains

12. Select the odd one out among the following given words.

A. Hawk

B. Porrot

C. Falcon

D. Eagle

E. Vulture

13. Identify the given image



- A. Ancient colossus
- C. Liberty Statue

- B. Statue of Zeus
- D. None of the above

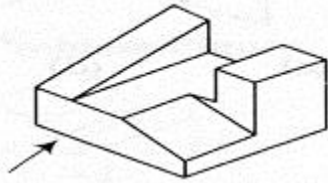
14. Victoria memorial is at

- A. bombay
- C. new delhi

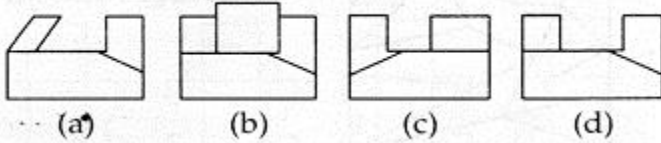
- B. coimbatore
- D. culcutta

15. the 3 D problem image shows the given of an object. identify the correct front view from among the answer figures looking in the direction of the arrow

**Problem Figure**




**Answer Figures**



- A. A
- C. C

- B. B
- D. D

16. In each of the following questions one of the figures is different from the rest. Spot the figure.



- A. A
- C. C

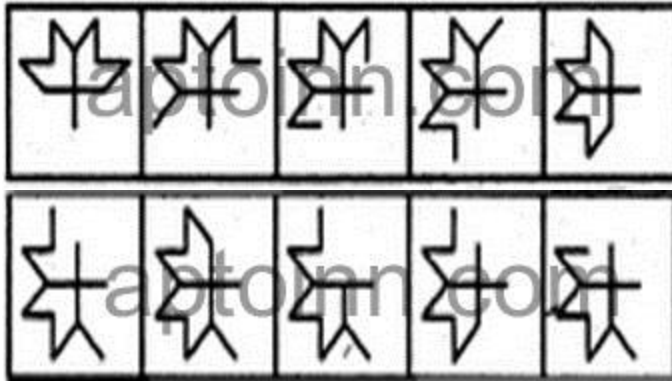
- B. B
- D. D

17. Where is Shore Temple situated?

- A. kochi
- C. Mahabalipuram

- B. Goa
- D. kanyakumari

18. Select a figure from amongst the Answer Figures which will continue the same series as established by the five Problem Figures.



- A. A
- C. C
- E. E

- B. B
- D. D

19. Hockey Game

- A. King; Rule
- C. Book; Read
- E. None of the about

- B. Constitution; Assembly
- D. Latin; Language

20. Identify the location of the given Building



- A. Delhi
- C. Mumbai


- B. Hyderabad
- D. Kolkata

21. Rashtrapathi Bhavan in new delhi is designed by

- A. Edward Samuel
- C. Eugene

- B. Edwin Lutyens
- D. Edwd howin

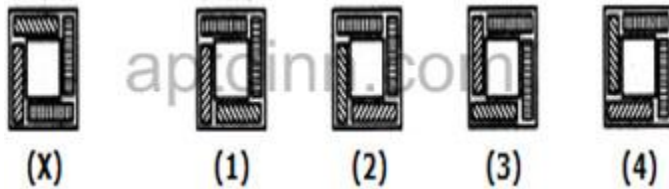
22. FIND THE TOTAL NO. OF RECTANGLES GIVEN IN THE PROBLEM FIGURE.



- A. 24
- C. 30

- B. 25
- D. NONE OF THESE

23. In each of the following questions, choose the water image of the Fig.(X) from amongst the four alternatives (1), (2), (3) and (4) given along with it.



- A. 1
- C. 3

- B. 2
- D. 4

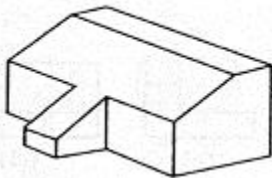
24. The Percentage of drinlable water in the Entire water available on earth is

- A. 4%
- C. 5%

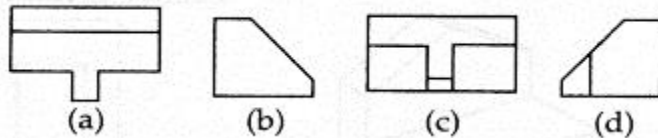
- B. 3%
- D. 10%

25. the 3 D problem figure shows the view of an object. Identify it's top view from among the answer figure.

**Problem Figure**



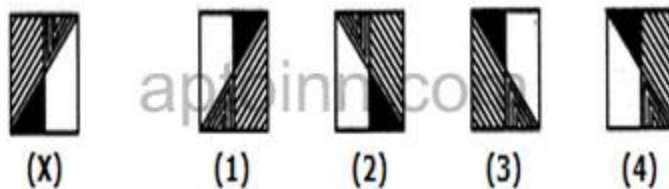
**Answer Figures**



- A. A
- C. C

- B. B
- D. D

26. In each of the following questions, choose the water image of the Fig.(X) from amongst the four alternatives (1), (2), (3) and (4) given along with it.



- A. 1
- C. 3

- B. 2
- D. 4

27. Captain' related to soldier in the same way as Leader is relat to;

- A. Chair
- B. Follower
- C. Party
- D. Minister
- E. Vote

28. In each of the following questions, you are given a combination of alphabets and/or numbers followed by four alternatives (1), (2), (3) and (4). Choose the alternative which is closely resembles the water-image of the given combination.

**QUARREL**

- (1) QUVBKEF
- (2) QUARRR7
- (3) QUVBKEF
- (4) JERRAUN

- A. 1
- B. 2
- C. 3
- D. 4

29. The building popularly known as "Palace of Winds" is

- A. Jantar Mantar
- B. Sky Tower
- C. Hawa Mahal
- D. Light House

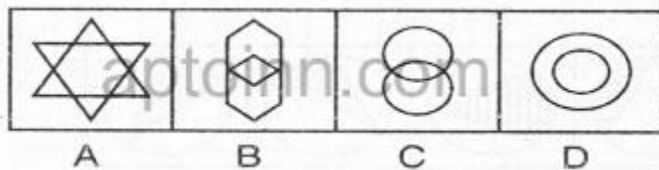
30. Sheila \_\_\_\_\_ her case book

- A. packed
- B. has packed
- C. had packed
- D. none

31. The famous Eiffel Tower is in?

- A. Paris
- B. France
- C. Italy
- D. Germany

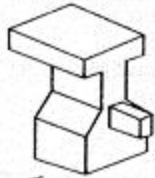
32. In each of the following questions one of the figures is different from the rest. Spot the figure.



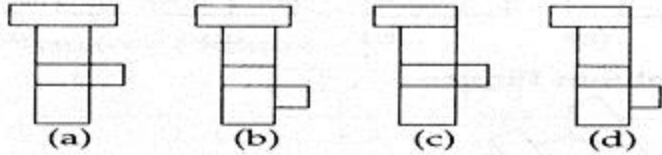
- A. A
- B. B
- C. C
- D. D

33. the 3 D problem image shows the given of an object. identify the correct front view from among the answer figures looking in the direction of the arrow

**Problem Figure**



**Answer Figures**



A. A  
C. C

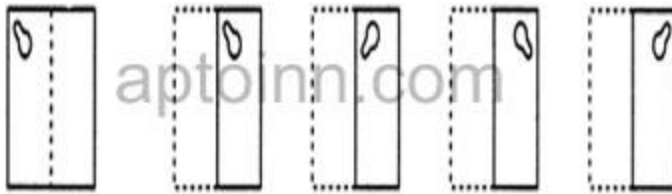
B. B  
D. D

34. a car needs a standard parking size of

A. 1.5\*2.5m  
C. 2.5\*5.0m

B. 2.0\*4.0m  
D. 3.0m\*6.0m

35. Find out from amongst the four alternatives as to how the pattern would appear when the transparent sheet is folded at the dotted line.



A. A  
C. C

B. B  
D. D

36. Red fort in Delhi is constructed with

A. sandstone  
C. marble

B. granite stone  
D. kadapa stone

37. Contamination; Food; Infection;?

A. Germs  
C. Disease  
E. Medicines

B. Disease  
D. Microbes

38. Who built the Jantar Mantar at Delhi in 1710?

A. Shahjahan  
C. Scindia Kingdom

B. Raja Jai Shing II  
D. Edwin Lutyens



39. Which word is the antonyms of "divulge"

- A. converge
- C. involve

- B. intake
- D. conceal

40. WHAT IS THE MATERIAL USED FOR THIS BUILDING?



- A. ASBESTOSE
- C. STONE

- B. CONCRETE
- D. TERRACOTTA

Ans:

- |       |       |       |       |       |       |       |       |       |       |
|-------|-------|-------|-------|-------|-------|-------|-------|-------|-------|
| 1. C  | 2. B  | 3. A  | 4. B  | 5. C  | 6. A  | 7. B  | 8. C  | 9. C  | 10. A |
| 11. A | 12. B | 13. A | 14. D | 15. D | 16. A | 17. C | 18. D | 19. D | 20. B |
| 21. B | 22. D | 23. D | 24. B | 25. A | 26. C | 27. B | 28. A | 29. C | 30. B |
| 31. A | 32. D | 33. C | 34. C | 35. D | 36. A | 37. C | 38. B | 39. D | 40. D |