



NATA

THEORY SAMPLE PAPER

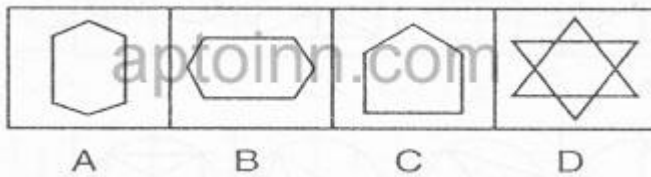
1. Select the odd one out among the following given words.

- A. Rectangle
- B. Rhombus
- C. Square
- D. Circle
- E. Trapezium

2. World's Tallest Building Today is

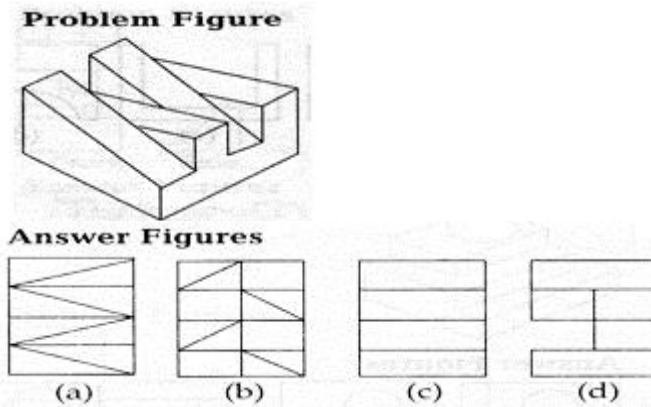
- A. Sears Tower
- B. Empire State Building
- C. Burj Khalifa
- D. Petronas towers

3. In each of the following questions one of the figures is different from the rest. Spot the figure.



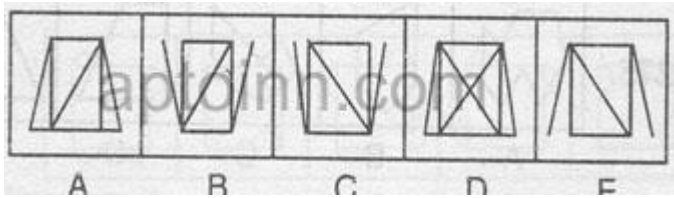
- A. A
- B. B
- C. C
- D. D

4. the 3 D problem figure shows the view of an object. Identify it's top view from among the answer figure.



- A. A
- B. B
- C. C
- D. D

5. In each of the following questions one of the figures is different from the rest. Spot the figure.



- A. A
- C. C
- E. E

- B. B
- D. D

6. Marriage is to Divorce as True is to;

- A. Truth
- C. Fiction
- E. None of these

- B. Story
- D. FALSE

7. the following questions shows the top, side and the front views of a 3 D object. Identify the correct elevations among the answer figures.

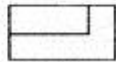
Problem Figures



Top

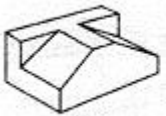


Front



Side

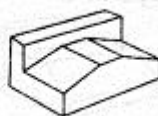
Answer Figures



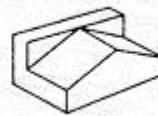
(a)



(b)



(c)



(d)

- A. A
- C. C

- B. B
- D. D

8. Identify the given image



- A. Flowing waters building
- C. Water Forest Building

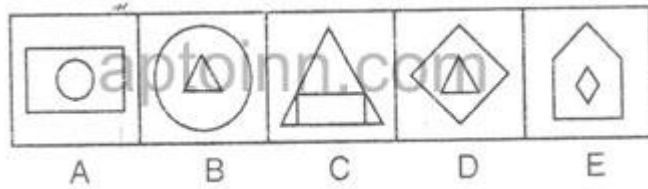
- B. Falling Waters Building
- D. "None of the above "

9. Select the odd one out among the following given words.

- A. Mars
- C. Saturn
- E. Venus

- B. Jupiter
- D. Sun

10. In each of the following questions one of the figures is different from the rest. Spot the figure.



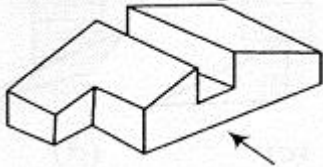
- A. A
- B. B
- C. C
- D. D
- E. E

11. which of the following mugal emperor built fatepur sikhri

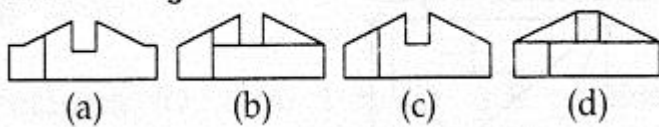
- A. saah jahan
- B. bhabur
- C. humayun
- D. akbar

12. The 3 D problem image shows the given of an object. identify the correct front view from among the answer figures looking in the direction of the arrow

Problem Figure



Answer Figures



- A. A
- B. B
- C. C
- D. D

13. Choose the pair related in answer options as it is related in the question "carpenter : saw "

- A. stenographer : typist
- B. painter : brush
- C. lawyer : brief
- D. runner : sneakers
- E. seamstress : scissors

14. the sun temple is located in

- A. bhubaneshwar
- B. konark
- C. mathura
- D. kajuraho

15. Identify the given Image



- A. Lalitha mahal
- C. Mysore palace

- B. rashtrapathi bhavan
- D. "\None of the above

16. In each of the following questions, you are given a combination of alphabets and/or numbers followed by four alternatives (1), (2), (3) and (4). Choose the alternative which is closely resembles the water-image of the given combination.

GR98AP76ES

- (1) GR98AP76ES
- (2) SE6T9A8RQ3
- (3) GR98AP76ES
- (4) SE6T9A8RQ3

- A. 1
- C. 3

- B. 2
- D. 4

17. Identify the given image



- A. Ancient colossus
- C. Liberty Statue

- B. Statue of Zeus
- D. None of the above

18. Who built Jama Masjid of Delhi?

- A. Jahangir
- C. Qutubud-din Aibak

- B. Shahjahan
- D. Akbar

19. In who's memory is the displayed structure built "



- A. Memory of british rule
- C. Memory of old kings

- B. Memory of Dead soldiers
- D. None of the above

20. in each of the following question choose the correct mirror image of the figure (X) from among the four alternatives (a,b,c,d) along with it.

Problem Figure



(X)

Answer Figures



(a)



(b)



(c)



(d)

- A. A
- C. C

- B. B
- D. D

21. Identify the given image



- A. Uchipillayar koil trichy
- C. mahabalipuram temple

- B. maduari meenakshi temple
- D. None of the above

22. The home church of a bishop usually the principal church in a diocese.

- A. Canopy
- C. Cathedral

- B. Castle
- D. Tomb

23. In each of the following questions, you are given a combination of alphabets and/or numbers followed by four alternatives (1), (2), (3) and (4). Choose the alternative which is closely resembles the water-image of the given combination.

RECRUIT

(1) RECRUIT

(2) RECRUIT

(3) RECRUIT

(4) RECRUIT

- A. 1
- C. 3

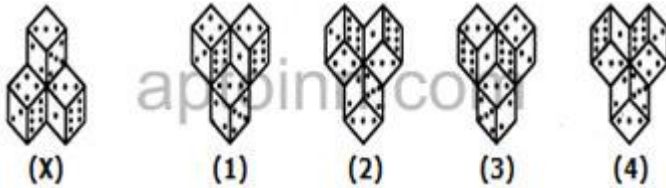
- B. 2
- D. 4

24. Identify the location of given Structure



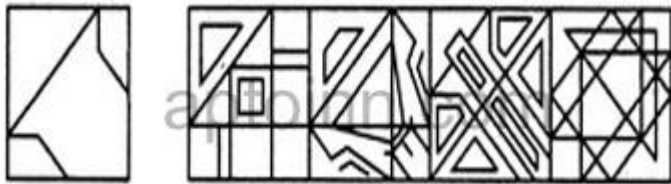
- A. Chennai
- B. Hyderabad
- C. Bangalore
- D. Kolkata

25. In each of the following questions, choose the water image of the Fig.(X) from amongst the four alternatives (1), (2), (3) and (4) given along with it.



- A. 1
- B. 2
- C. 3
- D. 4

26. Find out the alternative figure which contains figure (X) as its part.



- A. A
- B. B
- C. C
- D. D

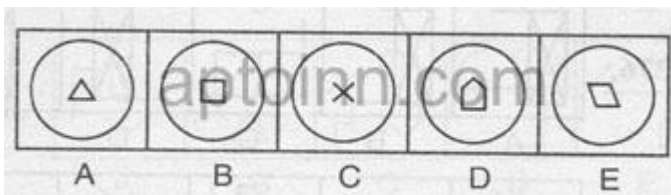
27. 'Parliament' is related to 'Great Britain' in the same way as 'Congress' is related to;

- A. Japan
- B. India
- C. U.S.A
- D. Netherlands
- E. Non of these

28. The Percentage of drinkable water in the Entire water available on earth is

- A. 4%
- B. 3%
- C. 5%
- D. 10%

29. In each of the following questions one of the figures is different from the rest. Spot the figure.



- A. A
- B. B

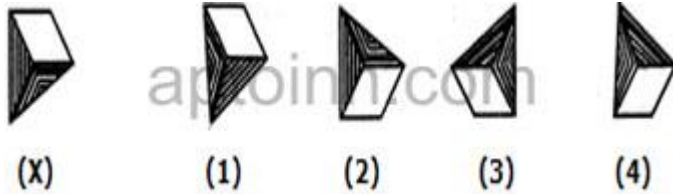
C. C
E. E

D. D

30. The topmost structural member of a column is called

- A. Frieze
- B. Architrave
- C. Capital
- D. Shaft

31. In each of the following questions, choose the water image of the Fig.(X) from amongst the four alternatives (1), (2), (3) and (4) given along with it.



- A. 1
- B. 2
- C. 3
- D. 4

32. What kind of wonder is the given image?

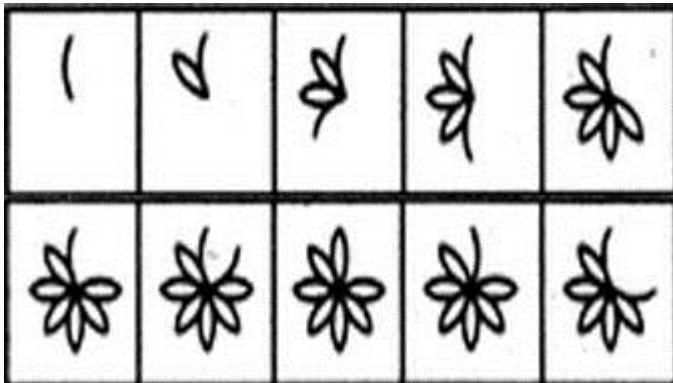


- A. Natural wonder
- B. contemporary wonder
- C. Medeval wonder
- D. Ancient wonder

33. Select the odd one out among the following given words.

- A. Premchand
- B. Kalidas
- C. Shakespeare
- D. G.B.Shaw
- E. Marlowe

34. Select a figure from among the Answer Figures which will continue the same series as established by the five Problem Figures.

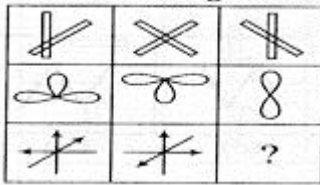


- A. A
- C. C
- E. E

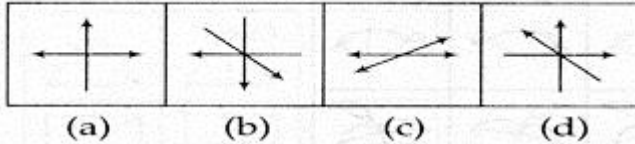
- B. B
- D. D

35. In each of the following questions, find out which of the answer figure (a, b, c, d) completes the figure matrix.

Problem Figures



Answer Figures



- A. A
- C. C

- B. B
- D. D

36. Which of these cities has the maximum number of historical monuments?

- A. Kolkata
- C. Mumbai

- B. Delhi
- D. Punjab

37. Find out the alternative figure which contains figure (X) as its part.



- A. A
- C. C

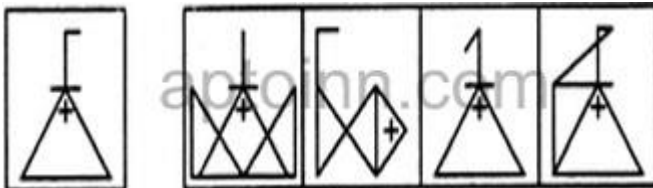
- B. B
- D. D

38. the asbestos cement sheet roof used over small sheds is

- A. scaly
- C. corrugated

- B. smooth
- D. rough

39. Find out the alternative figure which contains figure (X) as its part.



- A. A
- C. C

- B. B
- D. D

40. Select the odd one out among the following given words.

A. XWU
C. KJH
E. MLJ

B. QPM
D. DCA

Ans:

1. D	2. C	3. C	4. C	5. D	6. D	7. A	8. A	9. D	10. C
11. D	12. C	13. B	14. B	15. B	16. C	17. A	18. C	19. B	20. D
21. A	22. C	23. B	24. B	25. B	26. D	27. C	28. B	29. C	30. C
31. B	32. D	33. A	34. A	35. C	36. B	37. C	38. C	39. D	40. B